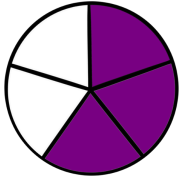
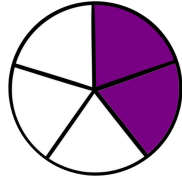


Brüche vergleichen

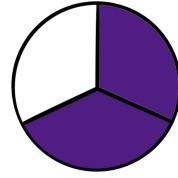
Verwende < und >



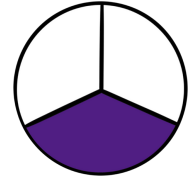
$$\frac{3}{5}$$



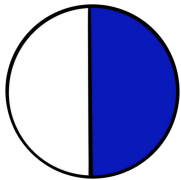
$$\frac{2}{5}$$



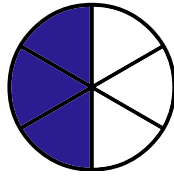
$$\frac{2}{3}$$



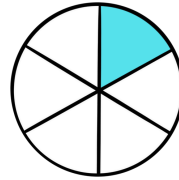
$$\frac{1}{3}$$



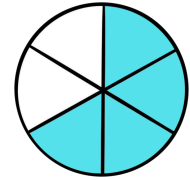

$$\frac{1}{2}$$



$$\frac{3}{6}$$

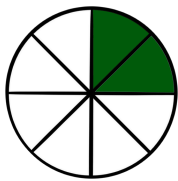


$$\frac{1}{6}$$

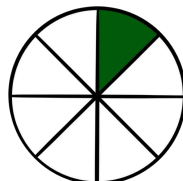



$$\frac{4}{6}$$

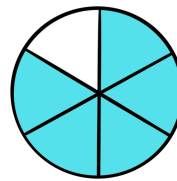
Schreibe die Brüche mit <, > oder =



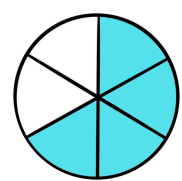
—



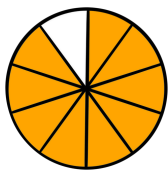
—



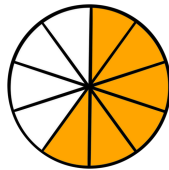
—



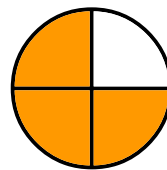
—



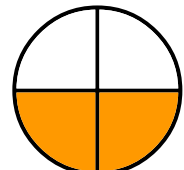
—



—



—



—